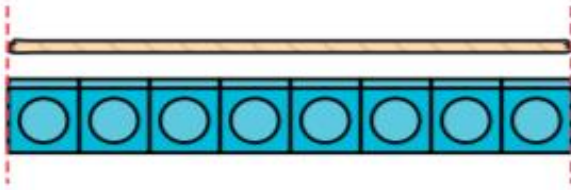


Maths. Week 2, Task 4.

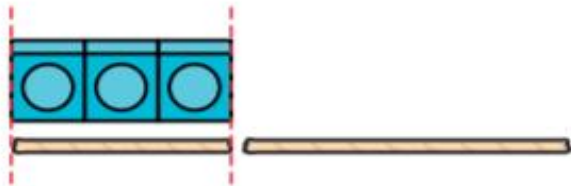
Complete the worksheet.

Subtracting lengths

- 1 A piece of string is 8 cubes long.



The string is cut into two pieces.
The short piece is 3 cubes long.




How long is the long piece?

- 2 Sam takes 17 steps forwards.
She then walks 5 steps backwards.
How many steps is she away from the start?
How did you work this out?



- 3 A teddy bear is 10 cubes tall.
A doll is 16 cubes tall.



How much taller is the doll than
the teddy bear?

- 4 A toy train is 18 cubes long.
A toy truck is 14 cubes long.
- a) How much shorter is the truck than
the train?
- b) A toy car is 9 cubes shorter than the truck.
Draw the car.

